


SUBTRACTION -

Picture problems




GET READY



Flashback 4

Year 1 | Week 8 | Day 4

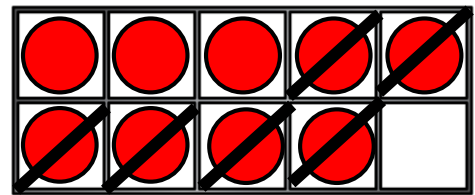


1) If there were 5 frogs and 2 hopped away, how many would there be?

$$5 - 2 = 3$$

2) What calculation is shown?

$$9 - 6 = 3$$



3) What is $4 + 5$? 9

4) What are the next two numbers? 4, 5, 6, 7, 8

LET'S LEARN





1 flies away

How many are left?

1 flies away



How many are left?





2 drive away

How many are left?

2 drive away



How many are left?





3 drive away

How many are left?

3 drive away



How many are left?






6 sail away

How many are left?

6 sail away



How many are left?





5 fly away


How many are left?

5 fly away




How many are left?





6 planes.



3 fly away.

How many are left?

$$6 - 3 = \boxed{}$$




8 planes.




4 fly away.

How many are left?

$$8 - 4 = \boxed{}$$



9 planes.



5 fly away.

How many are left?

$$9 - 5 = \square$$



6 planes.



5 fly away.

How many are left?

$$6 - 5 = \square$$

Can you write some subtraction equations for these pictures?



Now can you draw and write some subtraction equations of your own for a friend?