









Thursday 19th November

I can write and understand subtraction calculations.


Who I worked with.		What I used.		Me 
				
T	TA			T 




= _____



= _____



= _____









= _____

Can you create a picture of your own and write the matching calculation?

Friday 20th November

I can write a subtraction number sentence to go with a number story.

What I worked with.		What I used.		Me
				
T	TA	-----		T 



1 flies away



How many are left?



2 drive away



How many are left?



3 drive away



How many are left?



6 sail away



How many are left?



5 fly away



How many are left?

Now can you draw your own subtraction problem. Can your friend answer your question? Can you 'mark' it and explain why it is right or wrong?